

30.1.19	Objective:	To read and understand Roman Numerals.
		Can I read Roman numerals to 100 (I to C)? Can I understand that over time, the numeral system changed to include the concept of zero and place value?

Challenge 1

Varied Fluency

Write these calculations out in Roman Numerals and Arabic Numerals.

1. II + V =

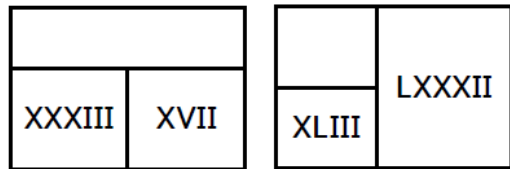
2. III + X =

3. VI + L =

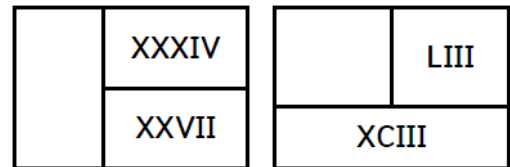
Challenge 1

Varied Fluency

Complete the bar models.



Complete the bar models.



Challenge 2

Varied Fluency

Complete the function machines.



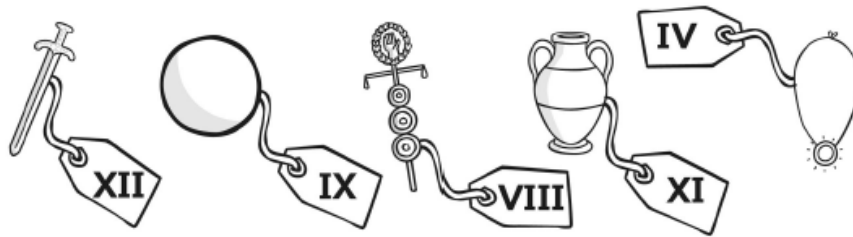
Challenge 2

Varied Fluency

10a. Fill in the missing Roman numerals in the number sequences.

LII	LXII		LXXXII	XCII
-----	------	--	--------	------

XCVII	XCVI	XCV		XCIII
-------	------	-----	--	-------



1	2	3	4	5	6	7	8	9	10
I	II	III	IV	V	VI	VII	VIII	IX	X
11	12	13	14	15	16	17	18	19	20
XI	XII	XIII	XIV	XV	XVI	XVII	XVIII	XIX	XX

Shopping List				
Monday		+		=
Tuesday		+		=
Wednesday		+		=
Thursday		+		=
Friday		+		=

Challenge Three

Reasoning and Problem Solving

Work out the cost of the items on this shopping list for each day of the week.